













Shopping for toys

A  £3.50	B  £3.00	C  £4.80	D  £2.10
E  £3.35	F  £1.05	G  £2.75	H  £2.99
I  £1.20	J  £ 2.99	K  £ 4.20	L  £1.25

Find the cost of the following toys:

1. $A + C =$ _____
2. $D + F =$ _____
3. $G + H =$ _____
4. $I + D =$ _____
5. $G + A =$ _____
6. $A + F + I =$ _____
7. $B + D + E =$ _____
8. $K + L + F =$ _____
9. $G + C + L =$ _____
10. $L + D + K =$ _____

Use this space for your working out.

My favourite toy is: _____

Answers

1. £8.30
2. £3.15
3. £5.74
4. £3.30
5. £6.25
6. £5.75
7. £8.45
8. £6.50
9. £8.80
10. £7.55